

Mrs. Mertz
3rd/4th

Virtual Learning Snow Day 1

Name: _____

Word Bank

chop

chin

chip


chick

Find the word from the word bank that describes each picture.
Use your nearest handwriting to write that word under each picture.



Name: _____

Emily cleans 13 yoga mats.



Chris cleans 6 mats.




 How many altogether?


Alana picks up 5 basketballs.






Cale picks up 12 basketballs.





 How many altogether?



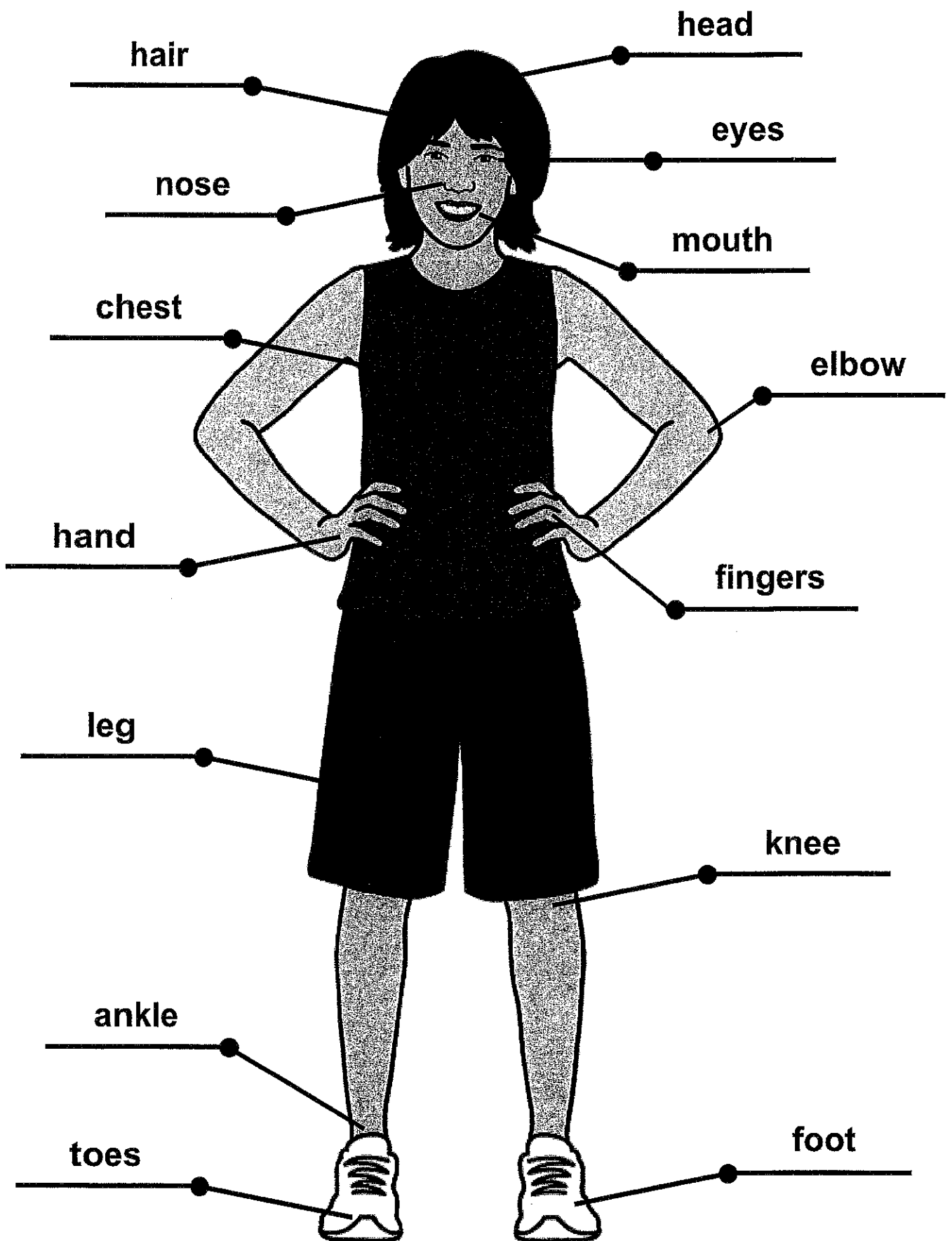
+




+



Science





















Level 3

fingers	eyes
hand	chest
mouth	head
knee	toes
hair	elbow
foot	ankle
leg	nose

Level 1 & 2

 fingers	 eyes
 hand	 chest
 mouth	 head
 knee	 toes
 hair	 elbow
 foot	 ankle
 leg	 nose

Virtual Learning Snow Day 2

Name: _____

Word Bank



ship

cash

shop

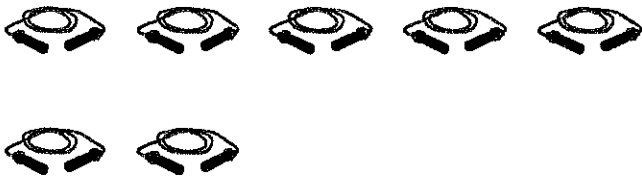
fish

Find the word from the word bank that describes each picture.
Use your neatest handwriting to write that word under each picture.



Name: _____

Emily folds 7 jump ropes.

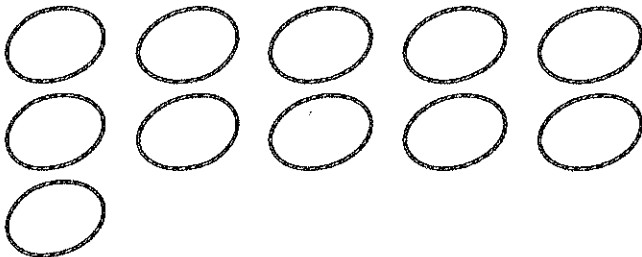


Chris folds 8 jump ropes.



 How many altogether?

Alana counts 11 hula hoops.



Cale counts 5 hula hoops.



 How many altogether?

$$\begin{array}{r} \square \\ + \square \\ \hline \square \end{array}$$

$$\begin{array}{r} \square \\ + \square \\ \hline \square \end{array}$$

Social
Studies

1

S	M	T	W	T	F	S
1	2	3	4	5	6	7
8	9	10	11	12	13	14
15	16	17	18	19	20	21
22	23	24	25	26	27	28
29	30	31				

On Monday, CJ raised his hand to ask a question. That is a rule.

3

S	M	T	W	T	F	S
1	2	3	4	5	6	7
8	9	10	11	12	13	14
15	16	17	18	19	20	21
22	23	24	25	26	27	28
29	30	31				

On Wednesday, CJ stayed in his seat at lunch. That is a rule.

5

S	M	T	W	T	F	S
1	2	3	4	5	6	7
8	9	10	11	12	13	14
15	16	17	18	19	20	21
22	23	24	25	26	27	28
29	30	31				

On Friday, CJ went to bed on time. That is a rule.

2

S	M	T	W	T	F	S
1	2	3	4	5	6	7
8	9	10	11	12	13	14
15	16	17	18	19	20	21
22	23	24	25	26	27	28
29	30	31				

On Tuesday, CJ played nicely with others at recess. That is a rule.

4







S	M	T	W	T	F	S
1	2	3	4	5	6	7
8	9	10	11	12	13	14
15	16	17	18	19	20	21
22	23	24	25	26	27	28
29	30	31				

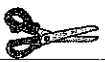
On Thursday, CJ walked in the halls. That is a rule.

6


S	M	T	W	T	F	S
1	2	3	4	5	6	7
8	9	10	11	12	13	14
15	16	17	18	19	20	21
22	23	24	25	26	27	28
29	30	31				

On Saturday, CJ picked up his toys in his room. That is a rule.






1



On Monday, CJ raised his hand to ask a question. That is a rule.

2



On Tuesday, CJ played nicely with others at recess. That is a rule.

3




On Wednesday, CJ stayed in his seat at lunch. That is a rule.

4



On Thursday, CJ walked in the halls. That is a rule.

5



On Friday, CJ went to bed on time. That is a rule.

6



On Saturday, CJ picked up his toys in his room. That is a rule.

Virtual Learning Snow Day 3

Name: _____

Word Bank

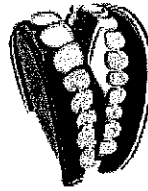
bath

thumb

teeth

moth

Find the word from the word bank that describes each picture.
Use your nearest handwriting to write that word under each picture.



Name: _____


Emily sees 10 volleyballs.

Chris sees 8 volleyballs.

 How many altogether?

+

=



Alana counts 6 scooters.

Cale counts 8 scooters.

 How many altogether?

+


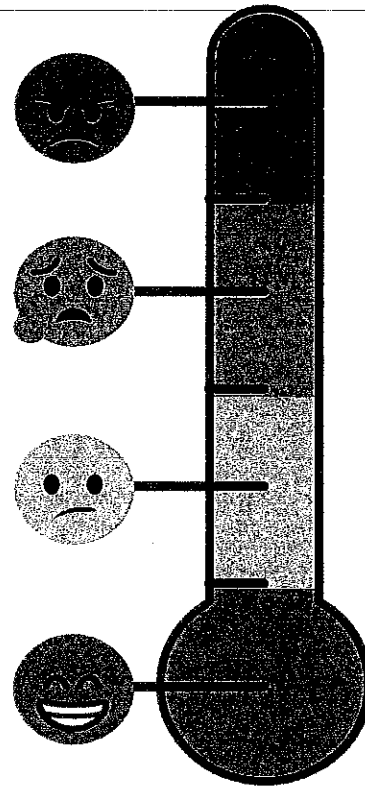
=



Social
Skills

MOOD MATCH


Can you tell the colour of the feelings below? Color the word box of each picture based on the mood thermometer.




happy




sad



angry




excited




surprised



tired



silly



scared